

# ExamUganda 2025

## LITERACY IB PRIMARY ONE (EOT II) 2025

### SECTION A

### Marking Guide

1. Give one thing we find in the home.

chair

2. Name this house in our Community.




Flat house

3. Why do children go to school?

to learn

4. Draw this item we find in the classroom.




Chalk board

5. What do policemen do?

keep law and order

6. Write down the name of this symbol on a school badge.



Pencil

7. Name this element of weather. Wind, clouds, Sun, rainfall.



rainfall

8. Where is food cooked from at home?

kitchen

9. Name the cloth we wear during cold weather.

Jacket

10. Name one item we play with at home.

ball, doll

11. Who treats sick people in our Community?

doctor

12. Name this danger we find on the way to the road. (Car knock / drowning)



drowning

13. What does rain give us Fresh water?

Fresh water (free mark)

14. Name <sup>any</sup> ~~this~~ garden tool.

hoe

15. Where do we buy food from?

Market

16. Give one example of furniture at your home.

Table


17. What is the use of a school bus?

transport pupils to school

18. Give one use of Water at home.

cooking , bathing

19. Name this person in our Community.




Teacher

18. What does a fisherman catch from the lake?

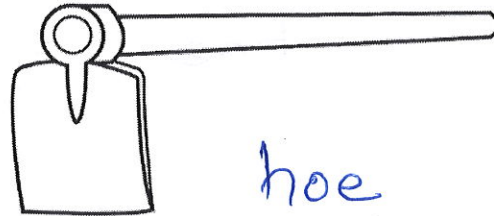
fish

## Section B: 60 Marks (2 marks each)

21. Name the garden tools below.



Panga



hoe

(panga axe slasher hoe)

22. Circle, three uses of Dater.

Running

drinking

Cooking

Digging

Sweeping

Watering

23. Match these garden tools to their uses.

Hoe

Carrying food.

Rake

Collecting rubbish

Basket




Watering Crops

Watering can

Digging

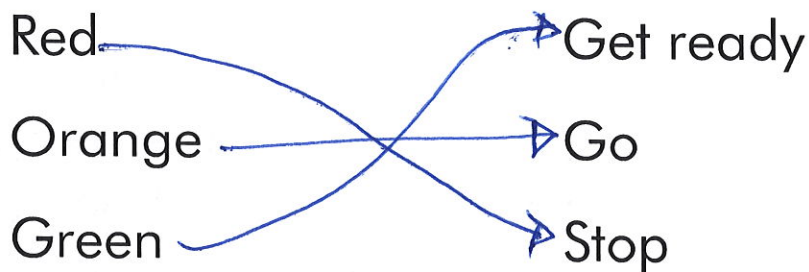


24. Fill in the types of Weather

	rainy
	cloudy
	windy

(Cloudy, rainy, windy)

25. Match colours of the traffic lights to their Meanings.



26. Name two people in the nuclear Family

Father Mother.

27. Who types Examinations and letters at school?

Secretary

(Secretary, Bursar, Cook, nurse)

28. Name the Main Natural Source of Water

lakes, rivers

b). Give two uses of Water

Cooking

drinking

bathing

29. Answer true or false)

(i) A clock is used for showing time. true

(ii) A cook uses a chalkboard. false

30. Make Correct sentences from the table

A teacher	cleans	pupils at school.
Dad	Pays	the compound.
A cleaner	teaches	School fees.

A teacher ~~pays~~ teaches pupils at school.

Dad Pays school fees.

A cleaner cleans the compound.

\*\*\*Wishing Success\*\*\*